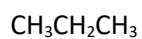
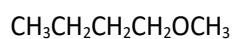
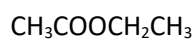
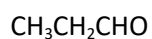
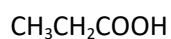
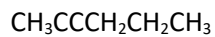
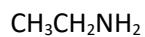
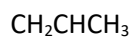


Week 5 Assignment: 20 points

1. For the below, give the name of the functional group and the IUPAC name of the molecule:  
(0.5 point each, 5 points total)



2. Give the condensed structural formula for each of the molecules below: (0.5 point each, 5 points total)

Propanol

Methyl Propanoate

Propyne

Ethanol

Methyl Ethyl

Ether

Dichloromethane

Ethene

Methane

Hexylamine

Formaldehyde (Methanal)